

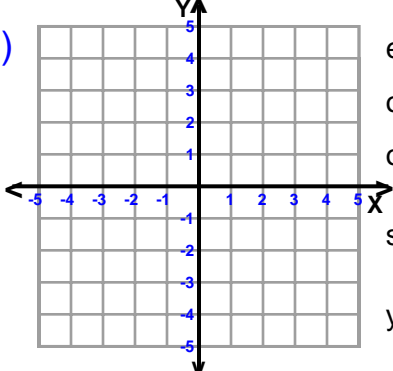
Name : _____

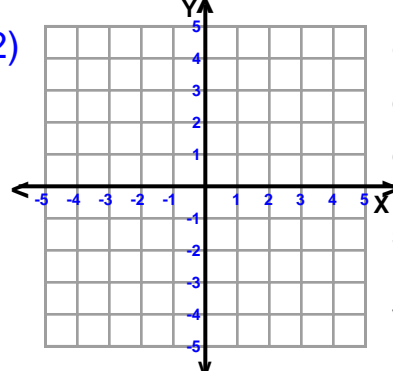
Score : _____

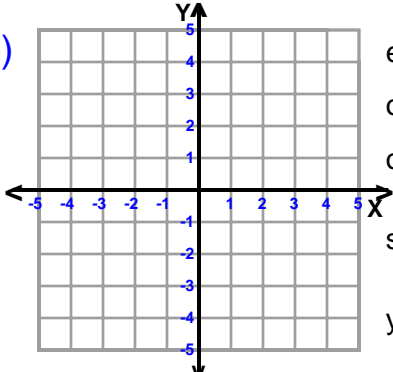
Teacher : _____

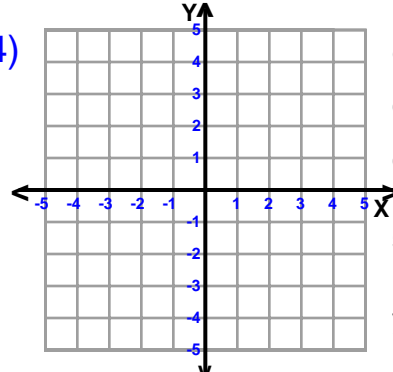
Date : _____

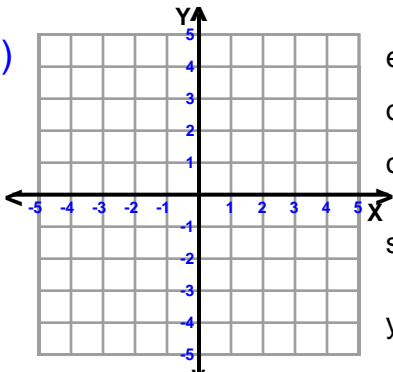
Sketch and Write the Equation For Each Line

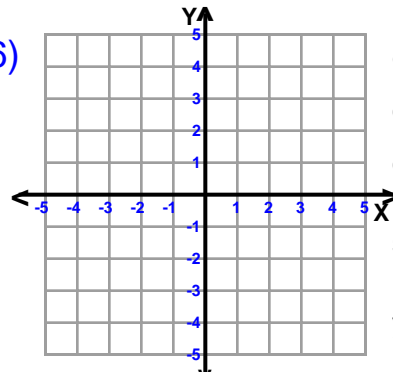
1)  equation _____
ordered pair = (3,3)
ordered pair = (-3,-1)
slope (m) = _____
y-intercept = 1

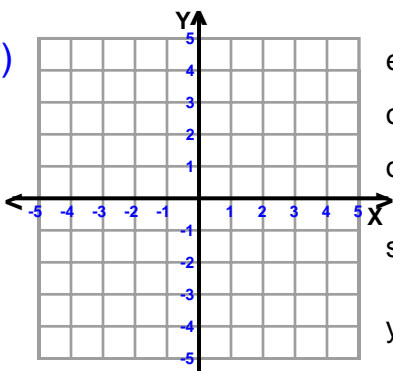
2)  equation _____
ordered pair = (-2,3)
ordered pair = (-1,0)
slope (m) = _____
y-intercept = -3

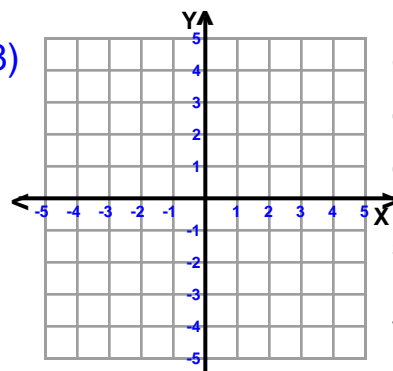
3)  equation _____
ordered pair = (3,0)
ordered pair = (-3,2)
slope (m) = _____
y-intercept = 1

4)  equation _____
ordered pair = (5,-1)
ordered pair = (-5,-3)
slope (m) = _____
y-intercept = -2

5)  equation _____
ordered pair = (2,2)
ordered pair = (4,0)
slope (m) = _____
y-intercept = 4

6)  equation _____
ordered pair = (3,-4)
ordered pair = (-1,4)
slope (m) = _____
y-intercept = 2

7)  equation _____
ordered pair = (-4,1)
ordered pair = (2,4)
slope (m) = _____
y-intercept = 3

8)  equation _____
ordered pair = (5,-4)
ordered pair = (-5,0)
slope (m) = _____
y-intercept = -2



Name : _____

Score : _____

Teacher : _____

Date : _____

Sketch and Write the Equation For Each Line

