

Name : \_\_\_\_\_

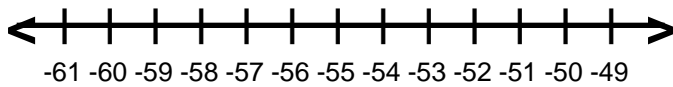
Score : \_\_\_\_\_

Teacher : \_\_\_\_\_

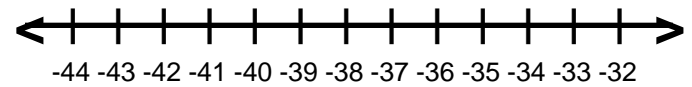
Date : \_\_\_\_\_

## Solve and Graph the Inequalities

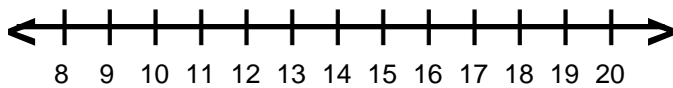
1)  $\frac{r}{5} \leq -11$



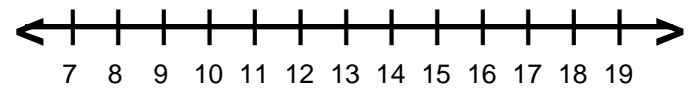
6)  $-13 \leq \frac{q}{3}$



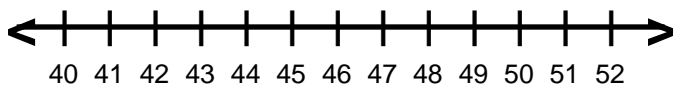
2)  $26 \geq 2a$



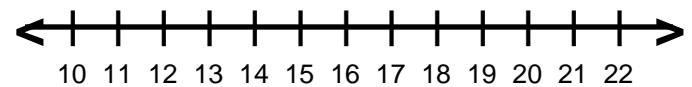
7)  $6s < 66$



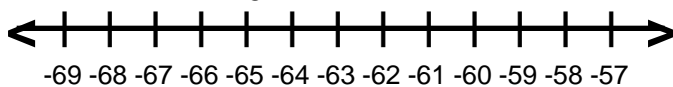
3)  $10 \geq \frac{p}{5}$



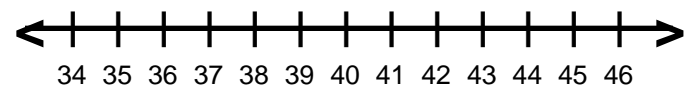
8)  $72 > 6g$



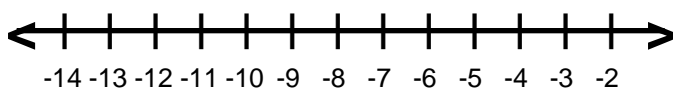
4)  $-10 < \frac{z}{6}$



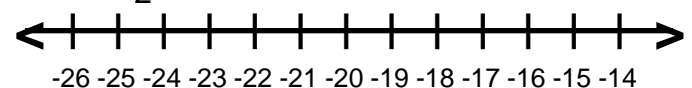
9)  $\frac{y}{4} \leq 9$



5)  $-5f < 40$



10)  $\frac{b}{2} \geq -11$



Name : \_\_\_\_\_

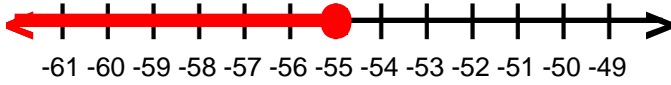
Score : \_\_\_\_\_

Teacher : \_\_\_\_\_

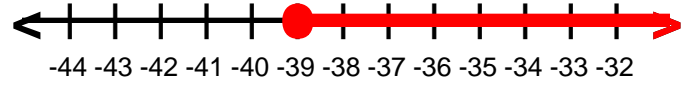
Date : \_\_\_\_\_

## Solve and Graph the Inequalities

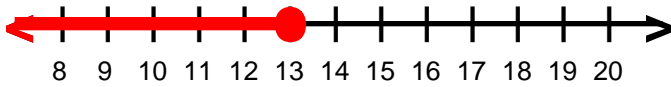
1)  $r \leq -55$



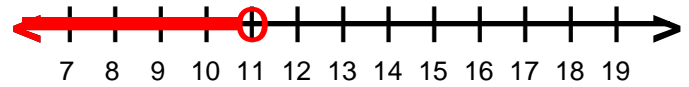
6)  $q \geq -39$



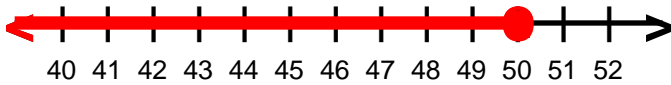
2)  $a \leq 13$



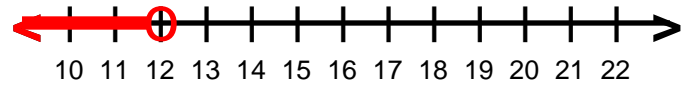
7)  $s < 11$



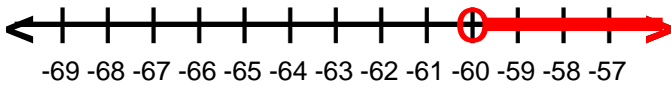
3)  $p \leq 50$



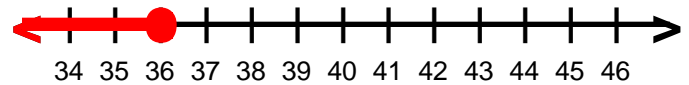
8)  $g < 12$



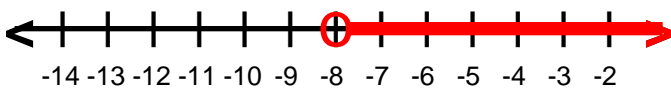
4)  $z > -60$



9)  $y \leq 36$



5)  $f > -8$



10)  $b \geq -22$

