

Name : \_\_\_\_\_

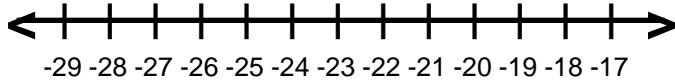
Score : \_\_\_\_\_

Teacher : \_\_\_\_\_

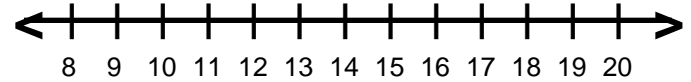
Date : \_\_\_\_\_

## Solve and Graph the Inequalities

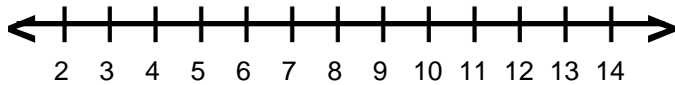
1)  $-14 < 5 + p$



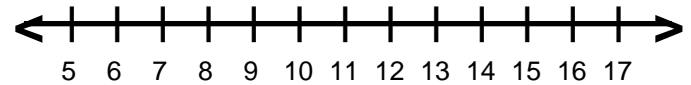
6)  $-2 + c \geq 16$



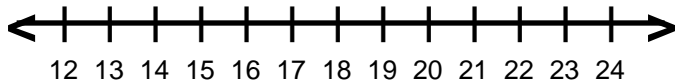
2)  $8 > z + 2$



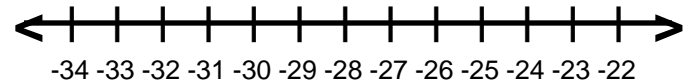
7)  $17 \leq r + 9$



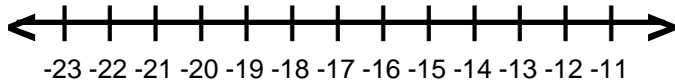
3)  $12 \leq -2 + w$



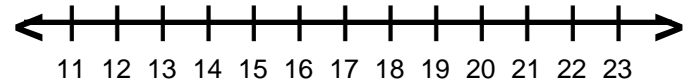
8)  $-19 < h + 7$



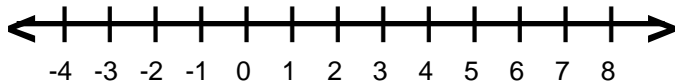
4)  $-8 \leq 7 + y$



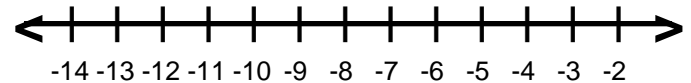
9)  $-6 + n \geq 11$



5)  $j + 1 \geq 5$



10)  $a + 3 > -9$



Name : \_\_\_\_\_

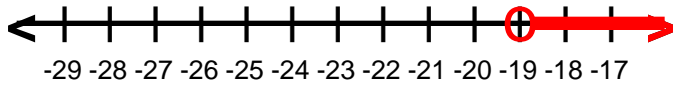
Score : \_\_\_\_\_

Teacher : \_\_\_\_\_

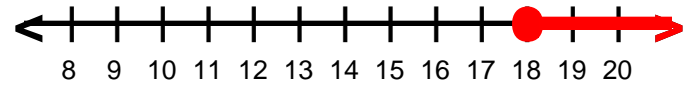
Date : \_\_\_\_\_

## Solve and Graph the Inequalities

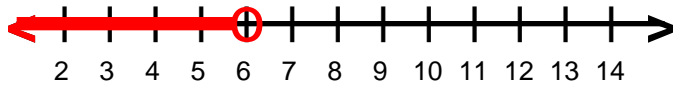
1)  $p \geq -19$



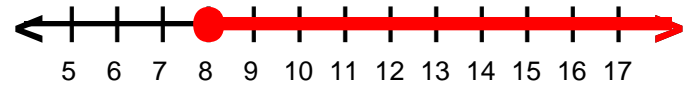
6)  $c \geq 18$



2)  $z < 6$



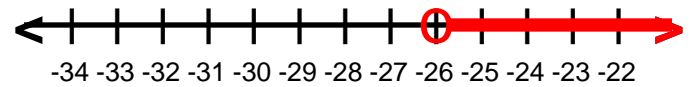
7)  $r \geq 8$



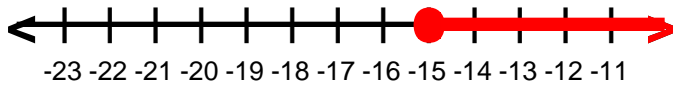
3)  $w \geq 14$



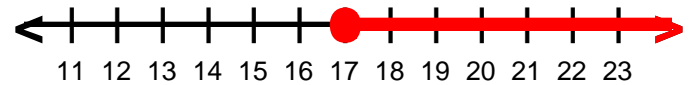
8)  $h \geq -26$



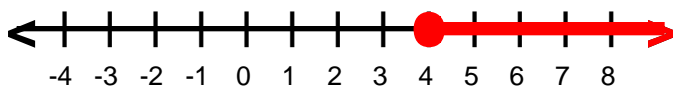
4)  $y \geq -15$



9)  $n \geq 17$



5)  $j \geq 4$



10)  $a \geq -12$

